

# NETBALL NEW ZEALAND



Name: \_\_\_\_\_

Centre: \_\_\_\_\_

Region: \_\_\_\_\_

## NZ THEORY EXAMINATION

### REGIONAL EXAM

July 2008

Time allowed: 1 hour

<b>INSTRUCTIONS TO CANDIDATES</b>		<b>Section One</b> Possible score: 10
1	Write your name and that of your Centre and Region in the spaces at the top of this page.	
2	Please use a blue or black pen (not red). Cross out any work not to be marked. Any work in pencil or using Correction Fluid will NOT be marked.	
3	Answer all questions on the printed examination paper. If you have insufficient space for an answer, use any space on the back of the paper or you may use your own paper. Be sure to put your name on any extra sheets. Label questions carefully. Make sure any extra sheets are handed in with your paper.	<b>Section Two</b> Possible score: 10
4	Teams referred to are BLACK and WHITE	
5	(a) It is NOT necessary to specify that the infringer must stand beside and away from the player taking the penalty (b) Similarly, it is NOT necessary to specify that the Umpire blows the whistle when penalising an infringement.	<b>Section Three</b> Possible score: 30
6	Check you have all questions for each of the following three sections:  Section 1      5 questions – 10 marks total Section 2      5 questions – 2 marks each Section 3      13 questions – 2 or 3 marks each	
7	All sections of the examination are in one booklet.	<b>Total</b> Possible score: 50
8	Read all questions carefully and answer all questions clearly and concisely. Answer only what is asked.	
9	For infringements where a general statement can cover a wide range of specific Infringements, the specific statement must be used. eg: <b>General Terminology</b> <b>Specific Terminology</b> Incorrect playing of ball                      Two bats and catch Incorrect throw in                              Throwing in from behind an offside area	<b>Result</b>
	Pass Mark 42.5 marks Total Mark 50 marks	

# SECTION 1

This Section has 5 questions. 10 marks for this section.

1/1 (i) What is the length of a netball court?

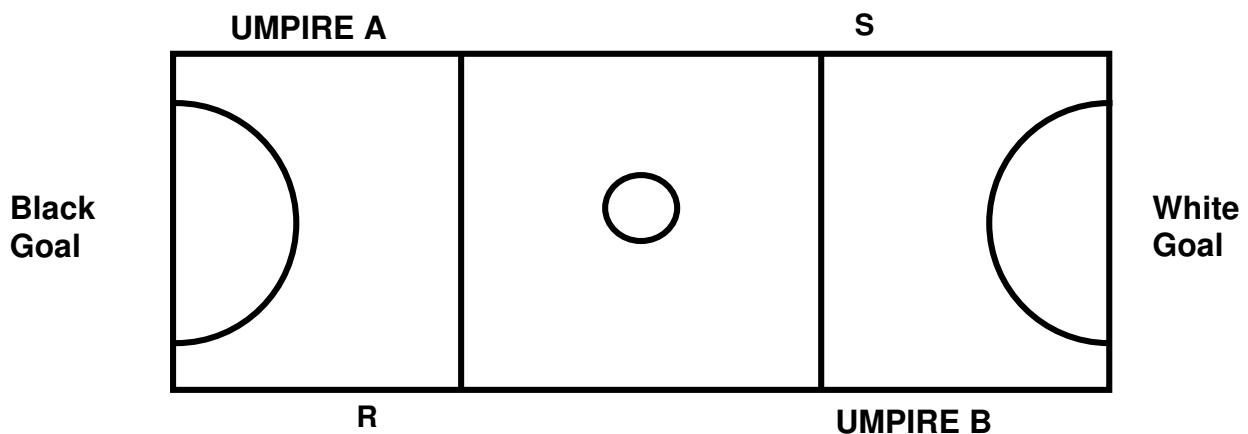
\_\_\_\_\_

(ii) What is the height of the Goalpost?

\_\_\_\_\_

(1 mark)

Refer to the court diagram (below) for Question 1/2 and 1/3.



1/2 At Black's Centre Pass the ball goes out of court untouched at Point R.

(i) How many infringement/s have occurred? \_\_\_\_\_

(ii) Name the infringement which will be penalised \_\_\_\_\_

(iii) Which Umpire penalises the infringement? \_\_\_\_\_

(iv) Name one player who could take this penalty \_\_\_\_\_

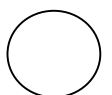
(2 marks)

1/3 Umpire A awards a Throw In to White at Point S. Black WD obstructs the Throw In.

(i) Which Umpire penalises this infringement? \_\_\_\_\_

(ii) What penalty is awarded? \_\_\_\_\_

(1 mark)



**1/4 Name four penalties an Umpire may award:**

- (i) \_\_\_\_\_
- (ii) \_\_\_\_\_
- (iii) \_\_\_\_\_
- (iv) \_\_\_\_\_

*(2 marks)*

**1/5 These questions are based on the new rules relating to the Duration of the Game.**

- (i) The half time interval in a 60 minute game shall be either \_\_\_\_\_ or \_\_\_\_\_
- (ii) Who makes the decision on the length of the interval? \_\_\_\_\_

*(2 marks)*

**1/6 These questions are based around the new rules on Stoppages.**

**Circle True or False for the following:**

- (i) Coaching is allowed during any stoppages for injury or illness. **T / F**
- (ii) The first injury/illness stoppage in each quarter or half, for each team, shall be up to 2 minutes. **T / F**
- (iii) Players may be treated for each subsequent injury/illness stoppage, in each quarter/half for each team, on the Court. **T / F**
- (iv) The Team Manager is permitted onto the court during a stoppage for injury/illness. **T / F**

*(2 marks)*



## SECTION 2

This Section has 5 questions. Each question is worth **2 marks**.  
Questions are designed to test your knowledge of Protocols and Discipline.

- 2/1** (i) When do the Umpires inspect the Court? \_\_\_\_\_
- (ii) State two things the Umpires inspect the Court for:
- \_\_\_\_\_
- (2 marks)*
- 2/2** Before the restart of play, the Umpire blows two warning whistles.
- (i) When are these given?
- \_\_\_\_\_
- (ii) Which Umpire blows these warning whistles?
- \_\_\_\_\_
- (2 marks)*
- 2/3** (i) Describe two actions the Umpire uses to indicate a stoppage for injury to the official bench as s/he blows the whistle to stop the game.
- \_\_\_\_\_
- (ii) Describe the specific type of whistle used to indicate an injury stoppage.
- \_\_\_\_\_
- (2 marks)*
- 2/4** (i) White GS goes to retrieve the ball to take a Throw In. White WA runs through the top of the Goal Circle to gain a better position. State the action/s the Umpire should take, including when action is taken.
- \_\_\_\_\_
- (ii) Black WD has been penalised a number of times for persistent offside in the Goal Circle. As the Umpire has already advanced a penalty into the Goal Circle, what would be the next step for the Umpire to take?
- \_\_\_\_\_
- (2 marks)*
- 2/5** Black GD has been suspended for persistent Obstruction.
- (i) Where must the suspended player sit?
- \_\_\_\_\_
- (ii) Can Black move an on-court player into GD for the duration of the suspension? **YES/NO**
- (2 marks)*



## SECTION 3

This Section has 13 questions. Each question is worth either **2 or 3 marks**.  
In this Section questions will vary in format however the intention remains the same.  
You are asked to demonstrate understanding of the rule.

**3/1** State the Umpire's action/s in each of the following scenarios:

- (i) Black WA catches the ball on the Goal Circle edge. She passes to Black GA who is very close to her, just inside the Goal Circle, with arms outstretched, to prevent White GD from intercepting the pass.
- 

- (ii) White GS and White GA both jump to rebound an unsuccessful shot at goal. White GS tips the ball, then White GA catches it before landing and shooting successfully for goal.
- 

- (iii) In attempting to gain possession of the ball at a rebound, White GD and Black GA both jump high for the ball. White GD catches the ball just before Black GA.
- 

*(3 marks)*

**3/2** Black C is defending correctly 0.9m from White C. At the end of 3 seconds, White C passes the ball.

Infringement: \_\_\_\_\_

Action: \_\_\_\_\_

*(2 marks)*


**3/3** Black's Centre Pass is caught by White GD who lands on both feet simultaneously, astride the Transverse Line. The Umpire allows play to continue. White GD throws a long pass that is caught by White GA standing in White's Goal Third.

- (i) State the action/s of the Umpire. \_\_\_\_\_
- 

- (ii) Explain why this action should be taken. \_\_\_\_\_
- 

- (iii) State the action/s the umpire would take if Black WA had caught the ball from the Centre Pass and landed on both feet simultaneously astride the transverse line.
- 

*(3 marks)*



**3/4** Black GS jumps to receive a rebound. White GK moves into the position where Black GS needs to land.

Name the infringement/s: \_\_\_\_\_

State the Umpire's action/s: \_\_\_\_\_

*(2 marks)*

**3/5** White C catches a pass and then drops the ball. White C then regains possession of the ball, before passing to White GS in the Goal Circle.

Name the infringement/s: \_\_\_\_\_

State the Umpire's action/s: \_\_\_\_\_

*(2 marks)*

**3/6** Black GA runs behind the Goal Line in order to get a better attacking position under the Goalpost. White GK, standing on Court, prevents Black GA from re-entering the Court.

Infringement/s: \_\_\_\_\_

State the Umpire's action/s: \_\_\_\_\_

*(2 marks)*

**3/7** White GA is shooting for goal. Black GD, while defending, accidentally kicks the Goalpost causing the shot at goal to miss.

Infringement: \_\_\_\_\_

Action: \_\_\_\_\_

*(2 marks)*

**3/8** White GA catches the ball and lands on her right foot outside the Goal Circle. White GA steps into the Goal Circle on her left foot and then shoots successfully for Goal.

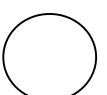
Infringement: \_\_\_\_\_

State the Umpire's actions: \_\_\_\_\_

Explain your reasons for this action: \_\_\_\_\_

\_\_\_\_\_

*(3 marks)*



**3/9** White C steps into the Centre Circle on her left foot just before the Umpire blows the whistle to start play. She steps out of the Circle on her right foot, then passing the ball to White WA before regrounding her left foot.

Infringement: \_\_\_\_\_

Action: \_\_\_\_\_

(2 marks)

**3/10** Black GD jumps, trying to deflect the ball as White GA shoots for goal. Black GD knocks White GA's hand just as she releases the ball. The shot is unsuccessful.

Infringement: \_\_\_\_\_

Action: \_\_\_\_\_

(2 marks)

**3/11** While defending the pass, Black WD overbalances and falls offside in the Goal Circle, just as White GA catches the pass in the Goal Circle and prepares to shoot for goal.

Infringement: \_\_\_\_\_

Action: \_\_\_\_\_

Explain your reasons for this action: \_\_\_\_\_

\_\_\_\_\_

(3 marks)

**3/12** Black GK, defending from the correct distance, waves her hand in front of White GS's eyes making it difficult for White GS to see the Goalpost.

Infringement/s: \_\_\_\_\_

Action: \_\_\_\_\_

(2 marks)

**3/13** White C, defending from the correct distance, jumps up and towards Black C, landing within 0.9m with her arms up making it difficult for Black C release the pass.

Infringement: \_\_\_\_\_

Action: \_\_\_\_\_

(2 marks)

