



NETBALL NEW ZEALAND
Pōitārāwhiti Aotearoa

NETBALL NEW ZEALAND

Name: _____

Centre: _____

Region: _____

NZ THEORY EXAMINATION

REGIONAL EXAM

May 2009

Time allowed: 1 hour

INSTRUCTIONS TO CANDIDATES

Please read these carefully before commencing the paper

- 1 Write your name and that of your Centre and Region in the spaces at the top of this page.
- 2 Please use a blue or black pen (not red). Cross out any work not to be marked. Any work in pencil or using Correction Fluid will NOT be marked.
- 3 Answer all questions on the printed examination paper. If you have insufficient space for an answer, use any space on the back of the paper or you may use your own paper. Be sure to put your name on any extra sheets. Label questions carefully. Make sure any extra sheets are handed in with your paper.
- 4 Teams referred to are BLACK and WHITE
- 5
 - (a) It is NOT necessary to specify that the infringer must stand beside and away from the player taking the penalty
 - (b) Similarly, it is NOT necessary to specify that the Umpire blows the whistle when penalising an infringement.
- 6 Check you have all questions for each of the following three sections:

Section 1	10 questions – 1 mark each
Section 2	5 questions – 2 marks each
Section 3	13 questions – 2 or 3 marks each
- 7 All sections of the examination are in one booklet.
- 8 Read all questions carefully and answer all questions clearly and concisely. Answer only what is asked.
- 9 For infringements where a general statement can cover a wide range of specific Infringements, the specific statement must be used.
eg:

General Terminology	Specific Terminology
Incorrect playing of ball	Two bats and catch
Incorrect throw in	Throwing in from behind an offside area

Pass Mark 42.5 marks
Total Mark 50 marks

Section One

Section Two

Section Three

Total

Result

SECTION 1

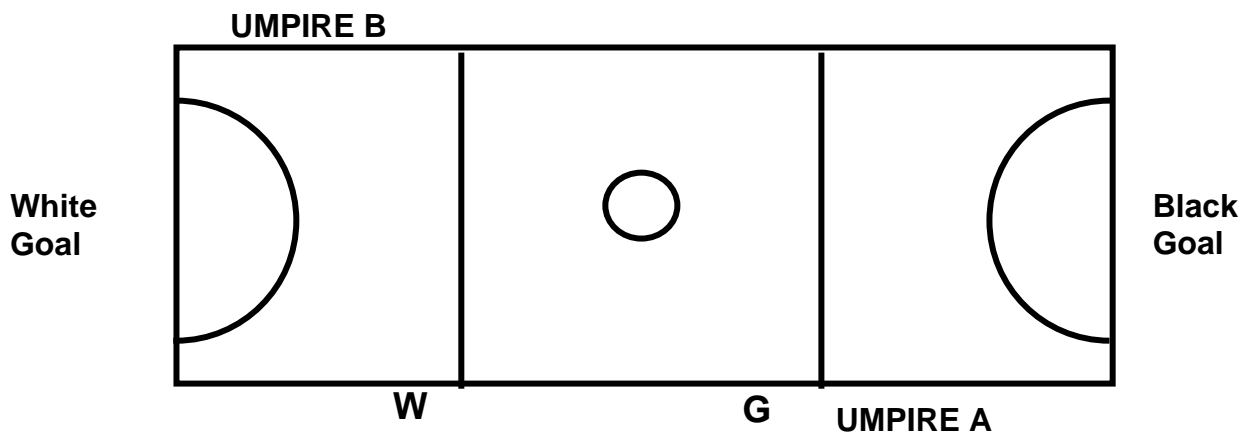
This Section has 10 questions. Each question is worth **1 mark**.

1/1 (i) State two occasions when a Toss Up would be awarded.

(ii) State two conditions that players need to observe when taking a Toss Up.

(1 Mark)

Refer to the court diagram (below) for Questions 1/2, 1/3.



1/2 (i) White has the first Centre Pass. Which Umpire starts play? _____

(ii) At Black's Centre Pass the ball goes out of court untouched at point G. Which Umpire penalises this infringement?

(1 Mark)

1/3 At White's Centre Pass the ball goes out of court untouched at Point W.

(i) How many infringement/s have occurred? _____

(ii) Where will the penalty be taken? _____

(1 Mark)


1/4 Name the three match Officials:

(i) _____

(ii) _____

(iii) _____

(1 Mark)



1/5 (i) Explain the term 'Substitution' _____
(ii) State two occasions when substitutions may be made. _____

(1 Mark)

1/6 The Umpire notices that Black WA is bleeding. State two action/s the Umpire should take.

(1 Mark)

1/7 A late player may not enter the game until the Umpire has been notified.
State two instances when a late player may take the court.
(i) _____
(ii) _____
(1 Mark)

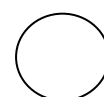
1/8 Black GS is injured. This is Black's second injury in the first quarter of the game.
Answer True or False to the following:
(i) Black GS must leave the Court. **True / False**
(ii) Black must play with 6 players until the next goal is scored. **True / False**
(1 Mark)

1/9 White GA is shooting for goal:
(i) Black GK knocks the goalpost causing the shot to miss. What penalty, if any, is awarded?

(ii) White GS knocks the goalpost causing the shot to miss. What penalty, if any, is awarded?

(1 Mark)

1/10 State two different infringements a Free Pass can be awarded for:
(i) _____
(ii) _____
(1 Mark)



SECTION 2

This Section has 5 questions. Each question is worth **2 marks**.
Questions are designed to test your knowledge of Protocols and Discipline.

- 2/1** (i) Before the beginning of the quarter or half, two warning whistles are given. When are these whistles blown?

- (ii) If teams are on court, are both the warning whistles blown? **YES / NO**

(2 Marks)

- 2/2** (i) At the end of a quarter or half, where should the umpires meet to walk off together?

- (ii) What should they verify at this time?

(2 Marks)

- 2/3** (i) White WA has been suspended for continual rough play. Where must White WA remain during the suspension period?

- (ii) Black C is suspended. What action must the Black team take for the game to continue?

(2 Marks)

- 2/4** (i) At the start of the first quarter the White team has five players on the court and Black has seven. May the game commence?

YES / NO


- (ii) Before the start of the game, which person must the names of the players be provided to?

(2 Marks)

- 2/5** (i) After a goal is scored, who is responsible for signaling the Centre Pass?

- (ii) After a goal has been scored, which Umpire calls the Centre Pass?

(2 Marks)



SECTION 3

This Section has 13 questions. Each question is worth either **2 or 3 marks**.
In this Section questions will vary in format however the intention remains the same.
You are asked to demonstrate understanding of the rule in a practical context.
Remember to state where any infringement is to be taken.

3/1 State the Umpire's action/s in each of the following:

- (i) White GK is taking a Throw In near the Transverse Line. The Black GA is defending her from 0.9m and is making it hard for her to pass the ball. White GK steps behind the sideline in the Centre Third just before releasing the ball.

- (ii) Black GS catches the ball just outside the Goal Circle. Black GS rolls the ball to Black GA who is standing close to the goalpost. Black GA picks up the ball and shoots successfully for goal.

- (iii) White GK is penalised for contact in the Goal Circle. As Black GS prepares to take the penalty, White GK calls out instructions to the GD.

(3 Marks)

3/2 Black WA, defending from the correct distance, makes it difficult for White WD to pass the ball. White WD passes the ball after 3 seconds.

Infringement: _____

Action: _____

(2 Marks)

3/3 White's Centre Pass is caught by Black GD with feet astride the Transverse Line.

Infringement: _____

Action: _____


(2 Marks)

3/4 White C receives a pass. Black WD runs past and knocks White C causing her to drop the ball.

Infringement: _____

Action: _____

(2 Marks)



3/5 White GD catches the ball in the Centre Third. White GD steps back into Black's Goal Third and passes the ball to White WA who is standing in White's Goal Third.

Name the infringement/s: _____

State the Umpire's action/s: _____

(2 Marks)

3/6 State the Umpire's action/s in each of the following:

(i) White C catches the ball just before Black WD.

(ii) White GK and White GD jump for a rebound. White GK catches the ball just before White GD. White GK releases the ball and White GD passes to White C.

(iii) Black WA tips the ball twice in an uncontrollable manner before gaining possession.

(3 Marks)

3/7 Black GD, defending from the correct distance waves her arms in front of White GA's eyes making it difficult for White GA to shoot for goal.

Infringement: _____

Action: _____

(2 Marks)

3/8 White GK stands facing the Goal Post 0.7m away from Black GA and makes no attempt to defend Black GA's shot at goal.

Infringement: _____

Action: _____

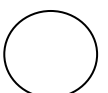
(2 Marks)

3/9 White WD goes offside into the Goal Circle. The Umpire calls advantage as Black C passes the ball to Black GS standing near the Goalpost. Black GS drops the ball and it bounces out of court.

Name the infringement/s: _____

State the Umpire's action/s: _____

(2 Marks)



3/10 Black C, defending from the correct distance, places a hand on the ball making it difficult for White WA to pass the ball.

Name the infringement/s: _____

State the Umpire's action/s: _____

(2 Marks)

3/11 Black C catches the ball and lands on her left foot. Black C steps forward onto her right foot then jumps onto her left foot before passing the ball.

Infringement: _____

Action: _____

(2 Marks)

3/12 White GS catches the ball and lands on her left foot outside the Goal Circle. White GS steps into the Goal Circle on her right foot and then shoots successfully for Goal.

Infringement/s: _____

State the Umpire's action/s: _____

Explain your reasons for this action: _____

(3 Marks)

3/13 White C and Black GK catch the ball simultaneously, before both players land in the Centre Third.

Name the infringement/s _____

What action should the umpire take? _____

Explain your reasons for this action: _____

(3 Marks)



Section 3
