

NETBALL NEW ZEALAND



NETBALL NEW ZEALAND
Poitara-whiti Aotearoa

Name: _____

Centre: _____

Region: _____

NZ THEORY EXAMINATION REGIONAL EXAM

July 2009

Time allowed: 1 hour

INSTRUCTIONS TO CANDIDATES	Section One												
<p>Please read these carefully before commencing the paper</p> <p>1 Write your name and that of your Centre and Region in the spaces at the top of this page.</p> <p>2 Please use a blue or black pen (not red). Cross out any work not to be marked. Any work in pencil or using Correction Fluid will NOT be marked.</p> <p>3 Answer all questions on the printed examination paper. If you have insufficient space for an answer, use any space on the back of the paper or you may use your own paper. Be sure to put your name on any extra sheets. Label questions carefully. Make sure any extra sheets are handed in with your paper.</p> <p>4 Teams referred to are BLACK and WHITE</p> <p>5 (a) It is NOT necessary to specify that the infringer must stand beside and away from the player taking the penalty (b) Similarly, it is NOT necessary to specify that the Umpire blows the whistle when penalising an infringement.</p> <p>6 Check you have all questions for each of the following three sections:</p> <table style="margin-left: 40px;"> <tr> <td>Section 1</td> <td>10 questions – 1 mark each</td> </tr> <tr> <td>Section 2</td> <td>5 questions – 2 marks each</td> </tr> <tr> <td>Section 3</td> <td>13 questions – 2 or 3 marks each</td> </tr> </table> <p>7 All sections of the examination are in one booklet.</p> <p>8 Read all questions carefully and answer all questions clearly and concisely. Answer only what is asked.</p> <p>9 For infringements where a general statement can cover a wide range of specific Infringements, the specific statement must be used.</p> <table style="margin-left: 20px;"> <tr> <td>eg: General Terminology</td> <td>Specific Terminology</td> </tr> <tr> <td>Incorrect playing of ball</td> <td>Two bats and catch</td> </tr> <tr> <td>Incorrect throw in</td> <td>Throwing in from behind an offside area</td> </tr> </table> <p>Pass Mark 42.5 marks Total Mark 50 marks</p>	Section 1	10 questions – 1 mark each	Section 2	5 questions – 2 marks each	Section 3	13 questions – 2 or 3 marks each	eg: General Terminology	Specific Terminology	Incorrect playing of ball	Two bats and catch	Incorrect throw in	Throwing in from behind an offside area	Section Two
Section 1	10 questions – 1 mark each												
Section 2	5 questions – 2 marks each												
Section 3	13 questions – 2 or 3 marks each												
eg: General Terminology	Specific Terminology												
Incorrect playing of ball	Two bats and catch												
Incorrect throw in	Throwing in from behind an offside area												
	Section Three												
	Total												
	Result												

SECTION 1

This Section has 10 questions. Each question is worth 1 mark.

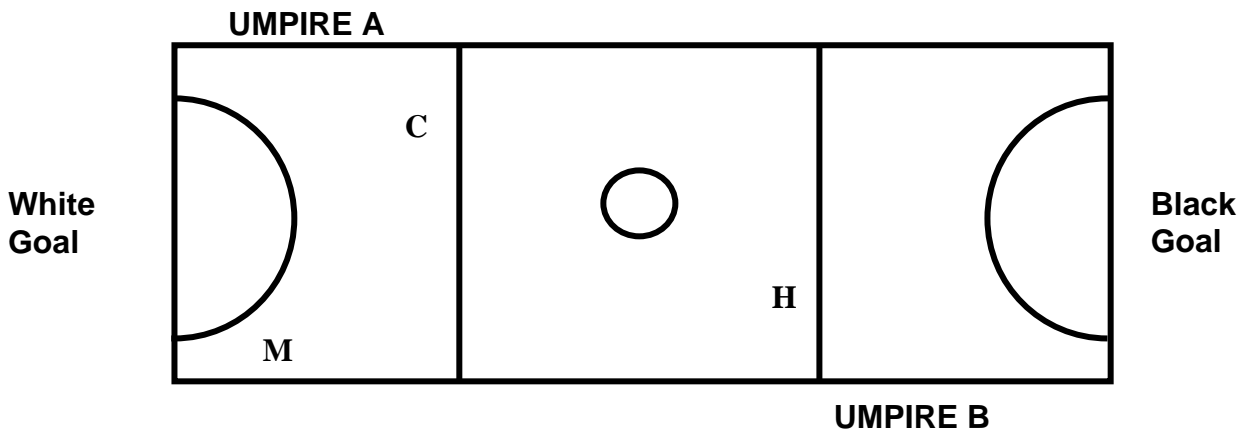
1/1 Before the game commences state two responsibilities of the captain.

(i) _____

(ii) _____

(1 Mark)

Refer to the court diagram (below) for Questions 1/2, 1/3.



1/2 (i) White has just scored a goal. Black has the next Centre Pass. Which Umpire restarts play?

(ii) At Black's Centre Pass, White WD breaks and catches the ball at Point H. Which Umpire penalises this infringement?

(1 Mark)

1/3 (i) Black has just scored a goal. At White's Centre Pass, the ball crosses the Transverse Line untouched and is caught by White GA at Point C. Which Umpire penalises this infringement?

(ii) A Toss Up is awarded at Point M between Black GS and White GD. Which Umpire takes the Toss Up?

(1 Mark)


1/4 (i) May an injured player, who has been substituted, return to the game?

YES/NO

(ii) Play is stopped for an injury to Black WA. May White GK and White GD change positions?

YES/NO

(1 Mark)



1/5 Name three team officials:

- (i) _____
- (ii) _____
- (iii) _____

(1 Mark)

1/6 (i) What is the length of the half time interval in a 60 minute netball game?

(ii) An interval may be extended by the Umpires to deal with any emergency. Name two occasions.

(1 Mark)

1/7 (i) What is the width of a netball court? _____

(ii) What is the diameter of the Centre Circle? _____

(1 Mark)

1/8 Black GD is injured. This is Black's second injury in the third quarter of the game.

(i) The injury time for Black GD is up to 2 minutes? **YES/NO**

(ii) Black GD must be treated off the Court. **YES/NO**

(1 Mark)

1/9 State three infringements a Free Pass can be awarded for.

(i) _____

(ii) _____

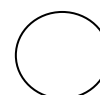
(iii) _____

(1 Mark)

1/10 (i) Who may approach the Umpires for a rules clarification? _____

(ii) State two times when the Umpires may be approached for a rules clarification.

(1 Mark)



SECTION 2

This Section has 5 questions. Each question is worth **2 marks**.
Questions are designed to test your knowledge of Protocols and Discipline.

2/1 White C is standing in the Centre Circle ready to take the Centre Pass.

(i) White GA has made little effort to get back and is not behind the Transverse Line. What action should the Umpire take?

(ii) Black C is standing in the Goal Third. What action should the Umpire take?

(2 Marks)

2/2 (i) Black C has been suspended for 3 goals. Where must she report to?

(ii) What action/s must the Black team take for the game to continue?

(2 Marks)

2/3 (i) At the end of the quarter/half of the game where do the Umpires meet? _____

(ii) Who do the Umpires advise of the first Centre Pass for the next quarter?

(2 Marks)

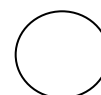
2/4 (i) The Umpires are required to check the court, players and equipment. When is this check carried out?

(ii) List two points the Umpires check in relation to the players.

(2 Marks)

2/5 What are the action/s of the walking Umpire 10 seconds prior to the start of a match?

(2 Marks)



SECTION 3

This Section has 13 questions. Each question is worth either **2 or 3 marks**.
In this Section questions will vary in format however the intention remains the same.
You are asked to demonstrate understanding of the rule in a practical context.
Remember to state where any infringement is to be taken.

- 3/1** White GD is taking a Side Line Throw In. White C, who retrieved the ball, is still outside the Court as White GD passes the ball to White GS in the Goal Circle.

Infringement: _____

Action: _____

Explain your reasons for this action: _____

(3 Marks)

- 3/2** At a Toss Up in the Goal Circle, White GA wins possession of the ball and shoots successfully for goal.

Infringement: _____

Action: _____

(2 Marks)

- 3/3** Black C catches a high ball and lands on one foot. To maintain balance she hops before passing the ball to Black GA.

Infringement: _____

Action: _____

(2 Marks)

- 3/4** White GS and Black GK are contesting a rebound. As Black GK jumps, White GS contacts her. Black GK is able to pass the ball cleanly to Black C.

Infringement: _____

Action: _____

Explain your reason for this action: _____

(3 Marks)

- 3/5** White C tips the ball, then bats it before gaining possession.

Infringement: _____

Action: _____

(2 Marks)



3/6 State the Umpire's action/s in each of the following:

(i) White GD is penalised for contact in the Goal Circle just before the Umpire blows the whistle for full time.

(ii) Black GK defending from 0.9m waves her hands in front of White GA's eyes.

(iii) Black is awarded a Free Pass in the Goal Circle. Black GA shoots successfully for goal.

(3 Marks)

3/7 White GS goes out of court and runs behind the Goal Circle. As White WA passes the ball, White GS jumps in the air and catches the ball before landing back on the court.

Infringement: _____

Action: _____

(2 Marks)

3/8 At White's Centre Pass the ball is caught by Black WD in the Goal Third near the Transverse Line. Black WD passes the ball to Black GS standing in the Goal Third.

Infringement: _____

Action: _____

Explain your reasons for this action: _____

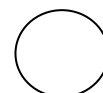
(3 Marks)

3/9 Black GD is taking a Throw In from behind the Goal Circle. White GS, standing on Court, places two hands on the ball.

Name the infringement/s: _____

State the Umpire's action/s: _____

(2 Marks)



3/10 White GK is taking a Throw In near the Transverse Line. White GK steps behind the sideline in the Centre Third before releasing the ball.

Infringement: _____

Action: _____

(2 Marks)

3/11 White C and Black GK catch the ball simultaneously, before both players land in the Goal Circle.

Name the infringement/s _____

What action should the umpire take? _____

(2 marks)

3/12 Black WA passes a high pass across the Goal Circle to Black GA. The ball goes through the goal ring.

Name the infringement/s _____

What action should the umpire take? _____

(2 Marks)

3/13 Black WD, attempting to intercept a pass, lands in the Goal Circle. White GS catches the ball near the Goalpost and shoots for goal.

Name the infringement/s _____

What action should the umpire take? _____

(2 Marks)

