

NETBALL NEW ZEALAND



NETBALL NEW ZEALAND
Poitarawhiti Aotearoa

Name: _____

Centre: _____

Region: _____

NZ THEORY EXAMINATION

REGIONAL EXAM

May 2010

Time allowed: 1 hour

INSTRUCTIONS TO CANDIDATES

Please read these carefully before commencing the paper

- 1 Write your name and that of your Centre and Region in the spaces at the top of this page.
- 2 Please use a blue or black pen (not red). Cross out any work not to be marked. Any work in pencil or using Correction Fluid will NOT be marked.
- 3 Answer all questions on the printed examination paper. If you have insufficient space for an answer, use any space on the back of the paper or you may use your own paper. Be sure to put your name on any extra sheets. Label questions carefully. Make sure any extra sheets are handed in with your paper.
- 4 Teams referred to are BLACK and WHITE
- 5
 - (a) It is NOT necessary to specify that the infringer must stand beside and away from the player taking the penalty
 - (b) Similarly, it is NOT necessary to specify that the Umpire blows the whistle when penalising an infringement.
- 6 Check you have all questions for each of the following three sections:

Section 1	8 questions – 1 or 2 marks each
Section 2	5 questions – 2 marks each
Section 3	13 questions – 2 or 3 marks each
- 7 All sections of the examination are in one booklet.
- 8 Read all questions carefully and answer all questions clearly and concisely. Answer only what is asked.
- 9 For infringements where a general statement can cover a wide range of specific infringements, the specific statement must be used.

eg: General Terminology	Specific Terminology
Incorrect playing of ball	Two bats and catch
Incorrect throw in	Throwing in from behind an offside area

Pass Mark 42.5 marks

Total Mark 50 marks

Section One

Section Two

Section Three

Total

Result

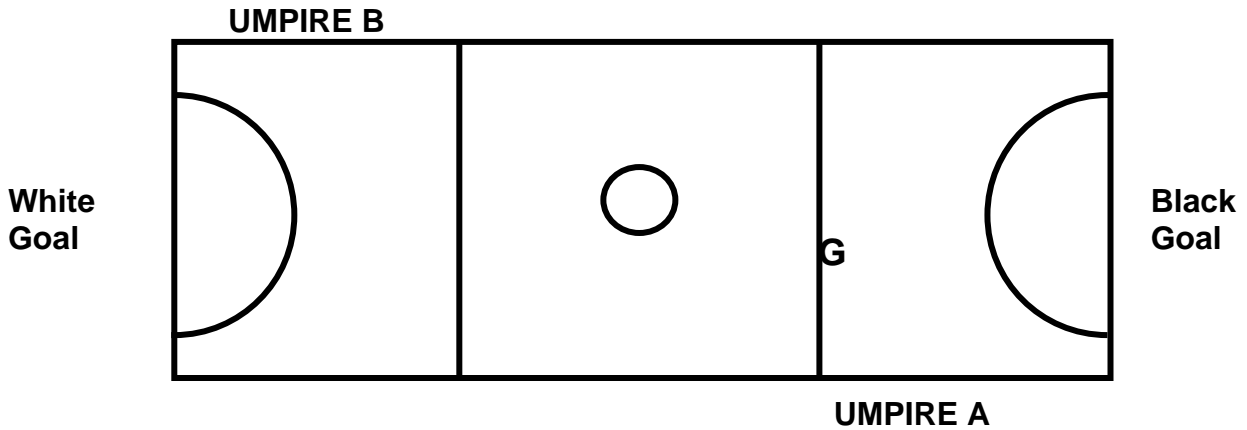
SECTION 1

This Section has 8 questions. Each question is worth 1 or 2 marks.

- 1/1 The netball shall measure between _____ and _____ in circumference and weigh between _____ and _____.

(1 Mark)

Refer to the court diagram (below) for Question 1/2.



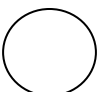
- 1/2 (i) Black has the first Centre Pass. Which Umpire starts play? _____
- (ii) At Black's Centre Pass the ball is caught by Black WA with feet simultaneously astride the transverse line at point G.
- (a) Name the infringement. _____
- (b) What penalty is awarded? _____
- (c) Where is the penalty awarded? _____

(2 Marks)

1/3 Before the start of play, the Umpires check the players.

- (i) Where does this occur? _____
- (ii) List two things the Umpire must check the players for:
- (a) _____
- (b) _____

(1 Mark)



1/4 Black GA is injured. This is Black's first injury of the game.

(i) Black GA may be awarded up to 2 minutes to receive treatment **TRUE/FALSE**

(ii) Black GA may move to GS and a new GA may take the Court. **TRUE/FALSE**

(1 Mark)

1/5 White have 5 players present at the start of the game.

(i) Can the game start? **YES/NO**

(ii) May a late player take the Court immediately after notifying the Umpire? **YES/NO**

(1 Mark)

1/6 Complete the following table by filling in the blank spaces:

Infringement	Penalty (if any)
Stepping White WA	
	Penalty Pass or Shot White
Deliberately kicking the ball Black C	
	Toss Up

(2 Marks)

1/7 The Umpire is required to hold time when a player who is bleeding is noticed.

For play to resume after the blood stoppage the following conditions must be met:

(i) _____

(ii) _____



(1 Mark)

1/8 What are the two responsibilities of the Primary Care Person?

(i) _____

(ii) _____

(1 Mark)




SECTION 2

This Section has 5 questions. Each question is worth **2 marks**.
Questions are designed to test your knowledge of Protocols and Discipline.

- 2/1** The ball is out of Court and the Umpire has awarded a Throw In to Black. As Black C is setting up for the Throw In, Black WA runs through the Goal Circle.
- (i) What penalty is awarded? _____
- (ii) Should the Umpire allow the Throw In to occur before penalising? **YES/NO**
(2 Marks)
- 2/2** (i) After a goal is scored, who is responsible for signaling the Centre Pass?

- (ii) What are two responsibilities of the Reserve Umpire during the game?
(a) _____
(b) _____
(2 Marks)
- 2/3** (i) Describe the actions of the walking Umpire at the 10 second warning whistle.

- (ii) At the end of a quarter or half, the Umpires meet mid Court.
(a) What do they verify at this time? _____
(b) Who do they inform of their decision? _____
(2 Marks)
- 2/4** White WD has been suspended for persistent infringing.
- (i) White WD must report to her team bench for the suspension period. **TRUE/FALSE**
- (ii) During the suspension period the WD position must remain vacant. **TRUE/FALSE**
(2 Marks)
- 2/5** Describe the whistles used in each of the following instances:
- (i) To hold time for an injury _____
- (ii) To end the match _____
(2 Marks)



SECTION 3

This Section has 13 questions. Each question is worth either **2 or 3 marks**.
In this Section questions will vary in format however the intention remains the same.
You are asked to demonstrate understanding of the rule in a practical context.
Remember to state where any infringement is to be taken.

- 3/1** After a goal is scored, White C runs back to the Centre Circle to take the Centre Pass. Black WD is slow to return back to the Goal Third and is still in the Centre Third when White C is standing within the Centre Circle.

Name the infringement/s: _____

State the Umpires action/s: _____

(2 Marks)

- 3/2** White GA jumps to receive a rebound. Black GK moves into White GA's landing position.

Name the infringement/s: _____

State the Umpires action/s: _____

(2 Marks)

- 3/3** Black GS receives a pass just inside the Goal Circle, landing with both feet on the line. Black GS turns and shoots for goal.

Name the infringement/s: _____

State the Umpires action/s: _____

(2 Marks)

- 3/4** White WD catches the ball and lands simultaneously on both feet. White WD steps forward on the right foot and then drags the left foot before releasing the ball.

Name the Infringement/s: _____

State the Umpires action/s: _____

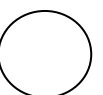
(2 Marks)

- 3/5** Black's Centre Pass is caught in the Goal Third by White WD. White WD passes the ball to White GS.

State the Umpire's action/s: _____

Explain your reasons for this action: _____

(3 Marks)



3/6 State the Umpire's action/s in each of the following:

(i) White WA holds on to Black WD skirt as Black WD moves to receive a pass.

(i) White WA catches the ball. Black C runs past White WA accidentally knocking the ball out of White WA's hands.

(ii) Black GA and White WD simultaneously push each other while attempting to gain possession of the ball.

(3 Marks)

3/7 White GS moves behind the Goal Line to gain a better position to take a pass. Black GD prevents the White GS from re-entering the Court.

Name the Infringement/s: _____

State the Umpires action/s: _____

(2 Marks)

3/8 White GS is shooting for goal. Black GD jumps from the correct distance making it difficult for the White GS to shoot.

Name the Infringement/s: _____

State the Umpires action/s: _____

(2 Marks)

3/9 White WD falls into the Goal Circle just as Black C passes the ball to Black GS standing near the Goalpost. Black GS shoots successfully for Goal.

Name the infringement/s: _____

State the Umpire's action/s: _____

(3 Marks)

3/10 Black GA shoots for Goal. White GD, defending from the correct distance, tips the ball and it passes completely through the Goal ring.

Name the infringement/s: _____

State the Umpire's action/s: _____

(2 Marks)



3/11 State the Umpire's action/s in each of the following:

- (i) White GA is attempting to shoot for goal. Black GK and Black GD defend from 0.9m, one in front and one on the side. White GA finds it hard to release the ball. After 3 seconds White GA shoots successfully for goal.

- (ii) White GD is penalised for obstruction in the Goal Circle. As Black GA is taking the penalty White GD calls out instructions to Black GK.

- (iii) White GS is shooting for Goal. Black GD defending from 0.9m places her hands in front of White GS's eyes.

(3 Marks)

3/12 White GA rolls the ball to White GS who is standing near the Goalpost.

Name the Infringement/s: _____

State the Umpire's action/s: _____

(2 Marks)

3/13 White GD is taking a Throw In from the Side Line. The wind catches the ball and prevents it from entering the Court.

Name the infringement/s: _____

State the Umpire's action/s: _____

(2 Marks)

